



Birches First School

Believe, Grow, Succeed



School Closure Home Learning

Year 1 Daily Tasks

- Please write the date before you start your work.

Wednesday 8th July 2020

English - Diary Entry

Tiddler ended up going on a real-life adventure the day he was caught in the net. Can you write a diary entry pretending to be Tiddle detailing what happened that day?

Remember: Capital letters, full stops, finger spaces, conjunctions and adjectives.

Diary entry

You may want to start by writing:

Dear diary...

Reading – Poetry

Read or listen to the poem 'Halfway Down' by A.A Milne and answer the questions. The link is below.

<https://www.youtube.com/watch?v=kxIjHyAn3xY&safe=active>

Why do you think Christopher Robin likes to sit on the stairs?

Do you have a favourite place in your home where you like to sit?

Which rhyming words can you spot in this poem?

Can you try writing a poem about your favourite place?

When I was a little girl, I used to play on the bottom of my stairs and pretend it was a bus. I put all my dolls and teddies on and would ask my family to pay bus fare if they wanted to go up the stairs. I made bus tickets and passes too!

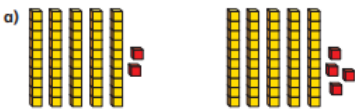
Perhaps you could make up your own game. Remember stairs are not safe to play on; you have to be very careful. I only played using the two bottom two steps and my mummy was always with me. I would love to see your pictures. Please email them to me.


Maths


Comparing numbers

Comparing numbers (1) White
Rose
Maths

1 Which is the greater number in each pair?

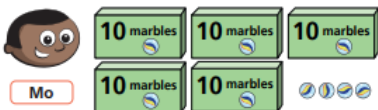
a) 


b) 

c) 


How do you know?

2 Mo and Kim each have some marbles.


Mo

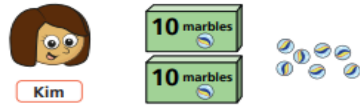

Kim

a) How many marbles does Mo have?
b) How many marbles does Kim have?
c) Who has more marbles?
How do you know?



© White Rose Maths 2020

- 2 Mo and Kim each have some marbles.



- How many marbles does Mo have?
- How many marbles does Kim have?
- Who has more marbles?
How do you know?

- 3 Use base 10

- Make a number greater than 50
What number did you make?
- Make a number less than 90
What number did you make?
- Make a number greater than 80
but less than 100
What number did you make?

Talk about your answers.

- 4 Write **greater than** or **less than** to complete the sentences.

- 72 is _____ 83
- 100 is _____ 99
- 65 is _____ 56