



Birches First School

Believe, Grow, Succeed



School Closure Home Learning

Year 4 Daily Tasks

Date: 9/6/20

Reading task - enjoy reading your favourite book or magazine. I would like you to focus on your writing task.

Writing/SPaG task

Today you are going to write your explanation text using your plan from yesterday. Use the checklist on the next page to help you.

Explanations

Title should explain what the explanation is for
e.g. 'What causes a tsunami?'

An opening statement about the subject
e.g. 'A tsunami is a giant powerful wave...'

Clear, simple key points about the subject
and why or how it occurs.

Use technical words where appropriate.

Use 'cause and effect' conjunctions e.g.
because, resulting in.

Use time conjunctions e.g.
Firstly, then, finally.

Write in the present tense.

End with a summary paragraph for the
explanation. Tell the reader something
interesting about the subject if possible.



Maths task

Money – ordering money - <https://vimeo.com/405804746>

Ordering money sounds quite easy BUT it is also about converting pounds into pence and pence into pounds so remember –

PENCE TO POUNDS

$$\begin{array}{c} \div 100 \\ \hline 100 \text{ p} = \text{£}1 \end{array}$$

POUNDS TO PENCE

$$\begin{array}{c} 100 \text{ p} = \text{£}1 \\ \hline \times 100 \end{array}$$

Here's an example

$$\text{£}6 = \underline{\underline{600}} \text{ p}$$

$$\text{£}6.07 = \underline{\underline{607}} \text{ p}$$

$$\underline{\underline{1,671}} \text{ p} = \text{£}16.71$$

$$1,001 \text{ p} = \text{£}\underline{\underline{10.01}}$$

1 What is the value of the digit 2 in these amounts?

a) 524p _____

b) £24 and 50p _____

c) £54.02 _____

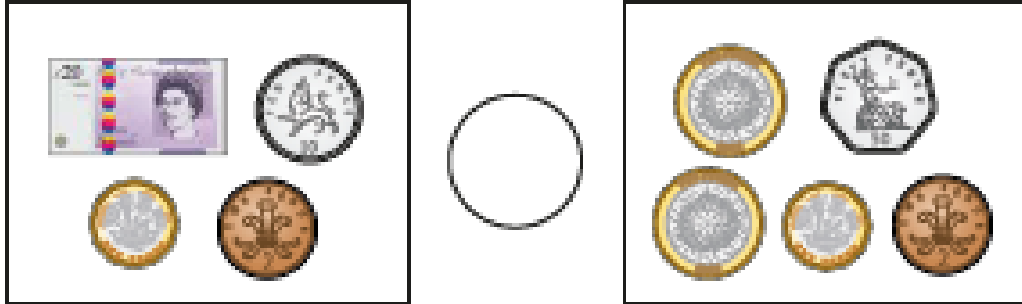
d) 5,240p _____

e) £42.54 _____

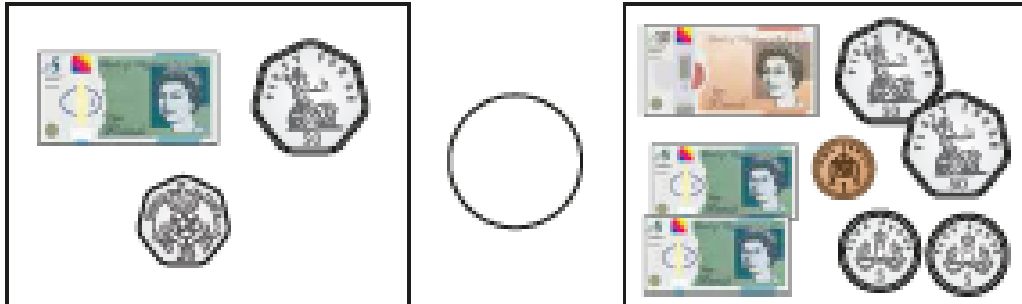
f) 2,544p _____

2 Write $<$, $>$ or $=$ to compare each pair of amounts.

a)



b)




c) How did you compare the amounts?

3 Draw three coins in each box to make the statements correct.


£26.70

<




£26.70

>



£26.70



Is there more than one way to make each statement correct?

4

Write $<$, $>$ or $=$ to compare the amounts.

a) 743p 734p

d) £40.07 4,003p

b) £37.40 £37.04

e) 4,037p £40.37

c) £3.74 734p

f) 7,304p £73.40

5

a) Write the amounts in ascending order.

270p

2,007p

2,700p

720p

7,020p

b) Write the amounts in descending order.

£4.65

£46.50

£6.45

£45.60

£46.05
