



Birches First School
Believe, Grow, Succeed



School Closure Home Learning
Year 1 Daily Tasks

- *Please write the date before you start your work.*

Tuesday 30th June 2020

English

Read the beginning of the poem *Bed in Summer* by Robert Louis Stevenson and answer the following questions.

Bed in Summer

In winter I get up at night
And dress by yellow candle-light.
In summer, quite the other way,
I have to go to bed by day.

I have to go to bed and see
The birds still hopping on the tree,
Or hear the grown-up people's feet
Still going past me in the street.

By Robert Louis Stevenson



1. **When** does the child in this poem have to get up in **winter**? **Tick one.**

- in the day
- at lunchtime
- at night
- in the afternoon

2. **Find and copy** 8 words in the poem that **rhyme**.

_____	_____
_____	_____
_____	_____
_____	_____

3. **What** does the child in the poem **hear** when going to bed in summer? **Tick one.**

- birds in the tree
- grown-up people's feet
- cars in the street
- children playing

4. Do you think the child in the poem prefers going to bed in **summer** or **winter**? **Why?**

5. **Which words** in the poem tell you that it is set in the past?

6. This is the last verse of the poem. Can you work out and fill in the missing words?

And does it not seem hard to you,
When all the sky is _____ and _____,
And I should like so much to _____,
To have to get to bed by _____?



Phonics

Choose a game on the websites below.

Phonics play:

<https://www.phonicsplay.co.uk/>

Comic's phonics play:

<http://www.phonicsplaycomics.co.uk/comics.html>









Maths

Today we are going to be learning to recognise coins.

Can you find these coins at home? You may want to set up a toy shop like you did at the start of your Home Learning time.

Recognising coins

1 Match the coin to the amount.

	20 pence
	5 pence
	10 pence
	1 pound
	1 pence
	50 pence
	2 pence
	2 pounds

2 Here are some coins.



Complete the sentences.

There are 1p coins.

There are 2p coins.

There is 5p coin.

There are 10p coins.

There are 20p coins.

3 Write < or > to compare the amounts.





4 Mo has one coin in his hand.



Draw Mo's coin.



What is the value of Mo's coin?



Is there more than one answer?

