



Birches First School
Believe, Grow, Succeed



School Closure Home Learning

Year 1 Daily Tasks

- *Please write the date before you start your work.*

Wednesday 20th May 2020

English



These words end in Y.

Can you read them and say each one in a sentence?

Can you write each one three times?

very

happy

funny

party

family

Can you think of any other words that end in Y?

Reading

Reading Skill: Inference

To infer is to use clues from the images and other information from a book/page that is not given by the author.

1. Look at the illustration
2. Read each question.
3. Write your inferences in your books and give sensible reasons

The family are going camping.

Where could they be?
Where will they sleep?
How might they cook their food?
What will they do while they're camping?



The boy is kicking leaves.

What time of year could it be?
How is the boy feeling?
Where might the boy be?



Maths

Today we are going to be learning about volume.

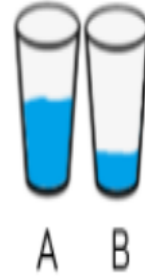
Compare the volume in each container by describing whether it is full, nearly full, half, empty or nearly empty.

Compare these two containers, which has more liquid in? Which has less?




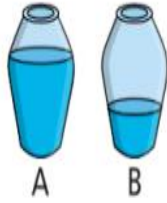
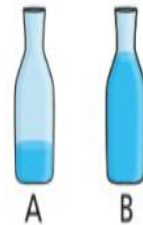
Use the words 'more' or 'less' to compare the containers.












A has _____ than B.



A has _____ than B.

Task 1	Task 2
<p>Choose a range of different containers and explore practically using water or sand.</p> <p>Use the language; full, empty, half, almost full, almost empty.</p>   	<p>Choose a word to complete the sentence.</p> <p><input type="text" value="more"/> <input type="text" value="less"/></p>  <p>A has _____ than B.</p>  <p>A has _____ than B.</p>

Task 3	Task 4
<p>Rosie, Teddy and Amir are describing their glasses of water.</p> <p> My glass has more water than Teddy's.</p> <p>Rosie</p> <p> My glass is nearly full.</p> <p>Teddy</p> <p> My glass has less water than Rosie's.</p> <p>Amir</p> <p>Can you fill in how much water could be in each of the children's glasses?</p> <p>  </p> <p>Rosie Teddy Amir</p> <p>Answer for this task will be on tomorrow's maths work</p>	<p>Compare the volume in each container by describing whether it is full, nearly full, half, empty or nearly empty.</p> <p>Compare two or more containers, which has more liquid in? Which has less?</p> <p>Use the words 'more' or 'less' to compare the containers. Choose a range of different containers, a measuring jug and explore practically using water or sand.</p>   

Fancy some Art?



Try and make a portrait, using found objects from around your house (and make sure you put them back afterwards!) and/or scrap materials, either of yourself or someone you know.

Try and show how that person is feeling and what they are thinking by what you include in the picture.

Can you include clues about the person's likes and dislikes within the portrait?

Art

Drawing tutorials:

<https://www.youtube.com/user/ArtforKidsHub>