



Birches First School  
Believe, Grow, Succeed



School Closure Home Learning

Year 1 Daily Tasks

- Please write the date before you start your work.

Thursday 14th May 2020

### English/Reading

Read the poem below and answer the questions.


#### Summer Rain

Muggy, hot day,  
Children home from school,  
Golden sunny day,  
In our paddling pool.

Gloomy, cloudy sky,  
Children home from school,  
Grey thunder clouds,  
In our paddling pool.

Spish, splash, splosh, PLOP  
Giggle, wiggle, woggle, PLOP  
Pitter, patter, pitter, PLOP  
Drip, drop, drop, PLOP

Plump rain pours,  
Look out the window!  
Soaked sunshine,  
A magnificent rainbow!



1. What adjective is used to describe the sunshine?

2. What are the children playing in?

3. What colour are the thunder clouds?

4. In verse three, which word is repeated?

5. What does verse three make you imagine?

6. Which word tells you that the rain drops are big and fat?

7. What do the children see at the end of the poem?

8. Have you ever seen a rainbow? If so, where did you see it?

# SPAG



## YR1 PROGRESSION IN MASTERY LESSON PACK - CAPITAL LETTERS AND FULL STOPS

### FLUENCY 1

Circle all the words that should start with a capital letter.

1. we went to the park last week.
2. tom and i are going to the cinema tomorrow.
3. jerry played football outside with his friends.
4. it was very cold when i went outside it.



### FLUENCY 2

Asha is confused about full stops. Circle any which are used incorrectly and add any which are missing.

1. I must not. stand on the flowers
2. Asha ate lots. of sweets on Friday night
3. I went to the park. On Saturday. with my friends.



### FLUENCY 3

Draw lines to match the sentence to the right statement.

Jane and i went to the football match last weekend and it was Amazing.

The road home was closed because of road works.

the clown did tricks at Jessica's party

Marlon burnt his mum's toast and she was Really upset.

I couldn't wait to get home today and play on the Playstation.

My mum is 30 today.

Correct use of full stops and capital letters

Incorrect use of full stops and capital letters

FLUENCY TASKS




© Copyright Deepening Understanding LTD 2018  
Photocopiable for educational purposes only

# Maths

## Add by counting on

- 1 There are 9 children on the bus.  
5 more children get on the bus.



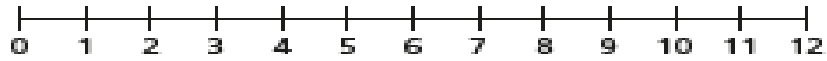
How many children are on the bus now?  
Complete the ten frames and the sentences.



$$\square + \square = \square$$

There are  children on the bus now.

- 2 Eva has 4 coins.  
Jack gives her 7 more coins.  
How many coins does Eva have now?  
Draw on the number line and complete the sentences.



$$\square + \square = \square$$

Eva has  coins now.

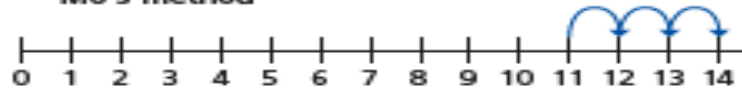
- 3 Ron and Mo are working out  $3 + 11$  on a number line.

Ron's method



## ★ Challenge

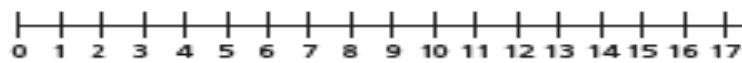
Mo's method



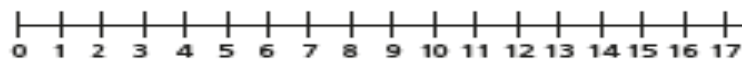
What is the same and what is different?

Use the number lines to work out the addition

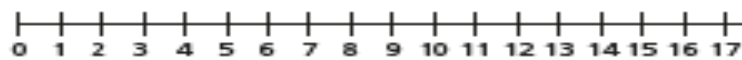
a)  $2 + 13 = \square$



b)  $4 + 9 = \square$



c)  $1 + 17 = \square$



# Optional Science Task



## DEEPENING UNDERSTANDING SCIENCE DEPTH TASKS

### REASONING 1

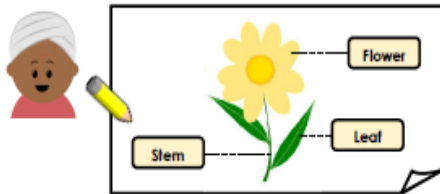
Year 1 observed a plant during April.



Describe what has happened to the plant.

### REASONING 2

Give your thoughts on Ranjit's flower diagram!



### REASONING 3

Anita draws some plants that she eats.



I eat the leaf of a lettuce.

Describe the other parts of plants that Anita eats.



© Deepening Understanding LTD 2018  
Photocopiable for educational purposes only

YEAR 1 PLANTS

Have fun!

Mrs Stubbs

xxx