



Birches First School
Believe, Grow, Succeed



School Closure Home Learning

Year 1 Daily Tasks

Date: 11/05/20







Happy Monday Year One! I hope you all had a lovely weekend and enjoyed the VE Day celebrations!

English

- Please write the date before you start your work.

Monday 11th May 2020

Today we are going to be learning about capital letters.

When to Use a Capital Letter	
Institutions <ul style="list-style-type: none">• Oxford University• Old Trafford• New York Police Department 	Places <ul style="list-style-type: none">• England• Bondi Beach• Taj Mahal• Australia 
Beginning of a Sentence <p>We went out driving today. We drove in a red car.</p> 	Titles <ul style="list-style-type: none">• Mr and Mrs• Dr• Prime Minister• Detective Smith 
Names of Religions <ul style="list-style-type: none">• Islam• Christianity• Hinduism• Buddhism 	Names <ul style="list-style-type: none">• Month of the Year• Days of the Week• Names of People: Sally, John, Felix, Charlie 

Complete the questions below and write your answers in your books.



Capital Letters for Names

I can use capital letters for the names of people, pets and places.

Remember that:

Capital letters are needed for names.


1. Use the pictures to help create your own sentence.



_____ and _____ have a cat called _____.

Teacher checks: Read it again Finger spaces Capital letters for names Full stop

2. Use the pictures to help create your own sentence.



The _____ lives in a big city called _____.

Teacher checks: Read it again Finger spaces Capital letters for names Full stop

Challenge!

Finish this sentence. Remember: Capital letters for names.

My teacher is called _____.

Personal Pronoun 'I'

Did you know that we use a capital letter for the word 'I'?
When you are talking about yourself, you say 'I'. It is the same when you write it.



It would not make sense if it said, "At the weekend i went swimming."




Read the following sentences and write each one yourself with a capital letter in the correct place.

1. john went to the park with his mummy.
2. i played in my garden with my brother and sister.
3. mark has fair hair but cara has dark hair.
4. on monday, i saw a big dog, when i went for a walk with my daddy.
5. last year i went on holiday to london to see buckingham palace.

Reading

Can you read any of the following words?

Year 1 Common Exception Words



Challenge

Write a sentence using some of the words above. Remember you will need to use a capital letter at the start of your sentence.

Fairy Tale Times

Farmer Fred Grows An Enormous Turnip!

There was a surprise last night at the Fairy Tale town vegetable show. Farmer Fred had brought his enormous turnip to show the judges and it was the size of a car!


The farmer had planted his turnip in March. He worked hard to feed and water it every day. He was shocked by how big it grew.

The farmer needed the help of his wife and his grandchildren, and even some of the farm animals to pull up the turnip.

Then they had to move it to the show. Fred used his tractor to pull the turnip.



1. Can you find another word in the text that means 'enormous'?



2. Where does the vegetable show take place?

3. Who is the first character that we meet in the text?



the farm animals

the farmer's wife

Farmer Fred

the farmer's grandchildren



4. Which fairy tale do you think this newspaper report is about?

The Gingerbread Man

The Enormous Turnip

Goldilocks and the Three Bears

The Princess and the Pea

Maths

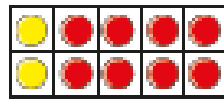
Printing is not required. Answer the questions in your home learning book or you may want to use chalks if you have them and make your own tens frames. Try to be as creative as you can. I would love to see your photographs!



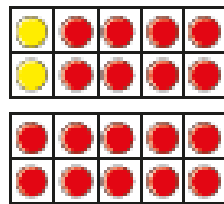
Find and make number bonds

I Complete the additions to match the ten frames.

a)

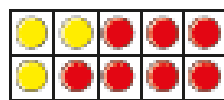


$$\square + \square = \square$$

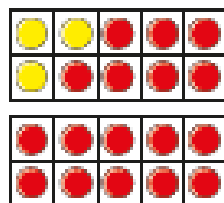


$$\square + \square = \square$$

b)



$$\square + \square = \square$$



$$\square + \square = \square$$

c) What do you notice?

2 Complete the number bonds.

a) $4 + 6 = \square$

$4 + 16 = \square$

b) $5 + 5 = \square$

$5 + 15 = \square$

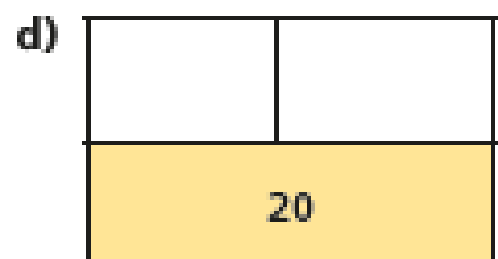

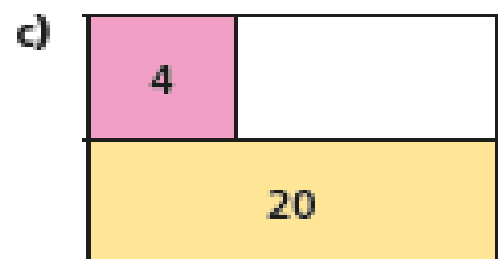
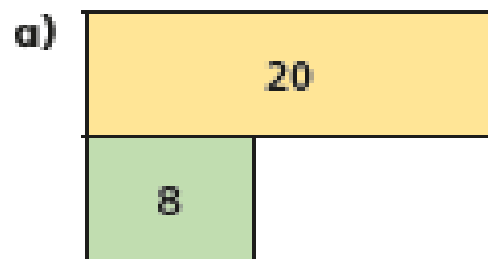
c) $10 = \square + 1$

$20 = \square + 1$

d) $10 = 3 + \square$

$20 = \square + 13$

3 Complete the bar models.



 Challenge

4 Colour all the number bonds to 20

$14 + 3$	$17 + 3$	$2 + 18$	$0 + 20$	$3 + 16$	$9 + 11$	$17 + 3$	$18 + 2$	$2 + 0$
$18 + 1$	$3 + 7$	$12 + 7$	$5 + 15$	$4 + 8$	$1 + 19$	$13 + 5$	$20 + 0$	$1 + 15$
$11 + 8$	$11 + 9$	$19 + 1$	$3 + 17$	$10 + 0$	$13 + 7$	$16 + 2$	$8 + 12$	$5 + 5$
$5 + 6$	$4 + 16$	$19 + 0$	$10 + 1$	$2 + 0$	$14 + 6$	$17 + 1$	$11 + 9$	$11 + 8$
$12 + 5$	$12 + 8$	$18 + 2$	$15 + 5$	$4 + 15$	$16 + 4$	$10 + 10$	$15 + 5$	$13 + 3$

Make your own puzzle like this.

Have fun!

Mrs Stubbs

xxx