



Birches First School
Believe, Grow, Succeed



School Closure Home Learning

Year 1 Daily Tasks

Date: 21/04/20

English

Look at the picture below and in your home learning books write three sentences describing what you can see.



Challenge

Include three adjectives and an exclamation mark (!)

Common Exception Word Activity Mat: are

1

Find and circle the word **are**.

are at at
one an one
are are art
arm are an
at

Highlight the word **are** in these sentences.

 We are happy. 
My eyes are tired.
Are you OK?
The dogs are big. 

Clap the word **are**.



Finish off the word **are**.

ar__	__re
a__	__c

Now write the full word.



Trace the word **are**.

are
are
are

Write the letter from the word **are** inside the box.

--	--	--

Add the word **are** to these sentences.

 What _____ you cooking?
_____ you free tonight?
Sally and Sita _____ good friends. 

Common Exception Word Activity Mat: our

(


Find and circle the word **our**.

our on one
one of our
one our one
our of of our

Highlight the word **our** in these sentences.

 Welcome to our house. 
Will you join our club?
Our rabbit is very old.
★ We will do our best. 

Clap the word **our**.



Finish off the word **our**.

ou__	__ur
o__	__r

Now write the full word.



Trace the word **our**.

our
our
our

Write the letters from the word **our** inside the boxes.

--	--	--


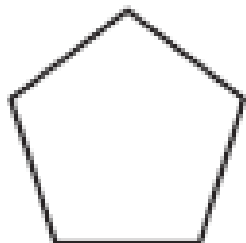


Add the word **our** to these sentences.

 Let's clean up _____ room. 
_____ town is very small.
_____ sister is very funny.

Maths

Fractions

Colour one half of each of these shapes:



Colour one half of each of these groups of animals:

a.



b.



c.



d.





Challenge

What number is half of 2? _____

What number is half of 4? _____

What number is half of 6? _____

What number is half of 8? _____

What number is half of 10? _____

What number is half of 20? _____

Have fun!

Mrs Stubbs

