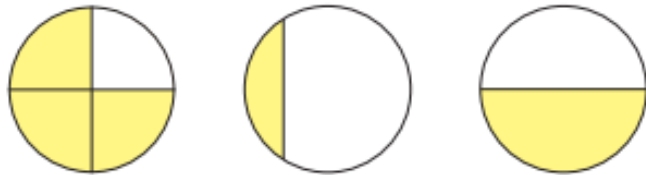



4 Which shapes show one half?

a)



b)




c)



5 Is half of the shape shaded?



6 Match the halves to make a whole.



MATHS: Multiplication and Division (Hot Task test)

Circle the groups that are equal.



How many apples are there altogether?



There are _____ apples altogether.

How many fingers are there altogether?



There are _____ fingers altogether.

Complete.



There are _____ trays of cakes.

There are _____ cakes on each tray.

There are _____ cakes altogether.


How many children are there altogether?



_____ + _____ + _____ + _____ = _____


There are _____ children altogether.

How many counters are there altogether?



There are _____ counters altogether.

Fill in the numbers to describe the array.



_____ + _____ = _____

_____ + _____ + _____ = _____

Sam has 8 strawberries.



She puts them into some bowls.
She puts the same number into each bowl.

How many bowls could she use?

Complete the sentences.



_____ bowls with _____ strawberry.



_____ bowls with _____ strawberries.



_____ bowls with _____ strawberries.

Mo has 10 sweets.
He shares them equally with Ron.



Each boy will have _____ sweets.


Complete.



Double _____ is _____



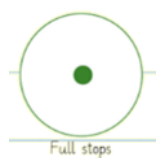

Double _____ is _____



Double _____ is _____

ENGLISH: Character Description (Peace at last)

TASK: To write a character description, using adjectives and **expanded noun phrases**.



and but because

WORD BANK:

sleepy tired stripy
furry uncomfortable

bear pillow pyjamas

In the small car...

Under the blanket...

Example: Daddy bear was lying under the **red, soft** blanket **because** he was cold.