



Birches First School

Believe, Grow, Succeed



School Closure Home Learning Year 2 Daily Tasks

Tuesday 30th June 2020 (Summer Term 2, Week 5 - Day 2)

Home learning tasks are designed so they can be read from a screen and completed into Home Learning Books. This reduces/ removes the need for printing. In some cases, questions may need to be copied out into home learning books. Of course you may print the tasks if this is easier for your family but please do not feel that you have to.

Maths Task (Multiplication and Division):

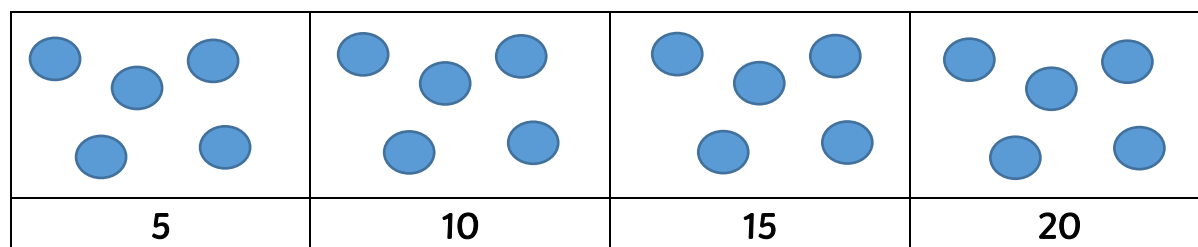
Make equal groups (grouping) -

We can not only make equal groups by sharing but we can do this by grouping too. We can then count on to find the total number of groups. We can use our learning of counting in 2s, 5s and 10s to help us too! Remember to stop counting when you get to your total number.

You could use real life objects to make into equal groups to help you.

Example:

Pencils come in packs of 20. We need to put 5 in each pot. How many pots will we need?



We can write this as a division number sentence.

$$20 \div 5 = 4$$

How many in total?

How many in each group?

How many groups?

Task:

1. Annie has 10 apples. Annie has some plates. She wants to put 2 apples on each plate. Show how Annie groups the apples. Then complete the number sentences below.



Complete the sentences.

There are apples.

There are apples on each plate.

There are plates.

2. Take 15 counters. Put the counters in groups of 5. Complete the sentences.



There are 15 counters.

The counters are in groups of

There are groups.

3. Mr has 20 chairs. Circle groups of 5 chairs.



How many groups did you circle?

Complete the number sentence.

$$\boxed{} \div \boxed{} = \boxed{}$$

4. Eva is putting 24 pencils into pots. She puts 2 pencils into each pot. How many pots does Eva need?



$$\square \div \square = \square$$

Eva needs pots.

5. Match the calculation to the image.

$$20 \div 4$$



$$12 \div 4$$



$$25 \div 5$$



$$9 \div 3$$




Challenge:




You have 30 counters. How many different ways can you put them into equal groups? Write down all of the possible ways?

Reading Task (inference):

Sinking



Task: Complete the thought bubbles below. How do you think some of the characters may be feeling/ what might they be thinking?



Writing/ SPAG Task:



You may want to watch the clip below again:
<https://www.literacyshed.com/onceinalifetime.html>

A verb is an action or a 'doing word'. We can use powerful verbs in our writing.

Task: Use your senses. What might the sky explorer experience while standing on the desk of his boat in the sky? Fill in the table below. Remember to use adjectives too!

See	Hear	Smell	Touch	Taste

