



Birches First School

Believe, Grow, Succeed



School Closure Home Learning Year 2 Daily Tasks


Tuesday 16th June 2020 (Summer Term 2, Week 3 - Day 2)

Home learning tasks are designed so they can be read from a screen and completed into Home Learning Books. This reduces/ removes the need for printing. In some cases, questions may need to be copied out into home learning books. Of course you may print the tasks if this is easier for your family but please do not feel that you have to.

Maths Task (Multiplication and Division):

2-Times Table -

Now we have become more confident with the concept of multiplication, we can apply this to help us with our multiplication tables. We can use our understanding of counting in 2s to help us too.



Before you start, practise counting in 2s. Can you spot a pattern?

Task:

1. Complete the sentences to work out the number of wheels.



___ lots of ___

___ x ___ = ___

2. Write a multiplication fact from the 2 times-table to match the picture.

a)



$$\square \times \square = \square$$

b)




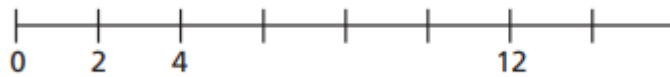
$$\square \times \square = \square$$

c)



$$\square \times \square = \square$$

3. Complete the number line and number tracks



4. Complete the number sentences.

a) $3 \times 2 = \square$

f) $\square = 12 \times 2$

b) $\square = 9 \times 2$

g) $2 \times \square = 2$

c) $2 \times 5 = \square$

h) $2 \times 0 = \square$

d) $2 \times \square = 4$


i) $14 = 2 \times \square$

e) $12 = \square \times 2$

j) $\square \times 2 = 22$

5.

One cupcake weighs the same as two cookies.



How many cookies will these weigh?

3 cupcakes

5 cupcakes

10 cupcakes.

I have 14 cookies, how many cakes do I need to balance the scales?



*Challenge: Have a go at matching the pairs below. Which questions/ answers are missing?
Clue: There are 4 cards missing.*



16	14
8	24
2×6	22
8 lots of 2	2×7
5×2	10 lots of 2
18	10
2×3	2 lots of 2
9×2	11 lots of 2
2	12
6	4


Reading Task (Express opinions about a text):

You can read or listen to the whole story again here: <https://www.booktrust.org.uk/books-and-reading/have-some-fun/storybooks-and-games/open-very-carefully/>

Task: Complete the book review below.

Title: _____

Author: _____

Did you like the book? 
Rate the book by colouring in the stars.

What was your favourite part?

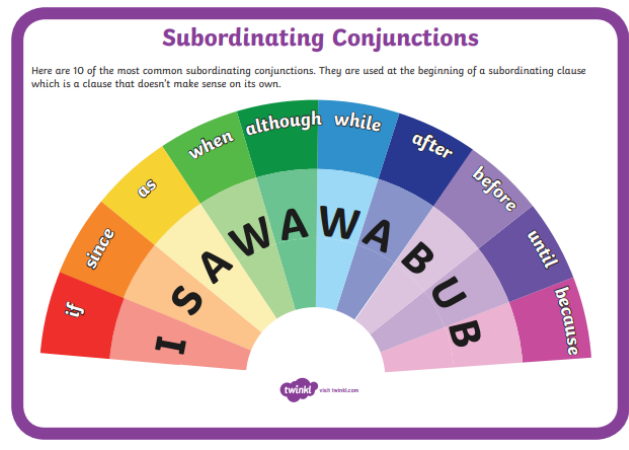
Draw your favourite scene from the book.

★ **Challenge:** You could fold a piece of paper and re-create the story book. ★
You can copy the storyline or add in a twist!

Writing/ SPAG Task:

Non-Chronological Reports – Using conjunctions

Before we write our non-chronological report tomorrow we need to make sure we have worked on all of the important skills we need to include to make our work the best it can be!



Task: Use the information from your notes yesterday to practise extending sentences using conjunctions. Write at least 5 sentences using conjunctions.

For example:

When elephants find waters, they like to swim.

Elephants have tusks so they are protected from other animals.