



Birches First School
Believe, Grow, Succeed



School Closure Home Learning

Year 1 Daily Tasks

- Please write the date before you start your work.

Friday 15th May 2020

Happy Friday Year One! The week has flown by.

English

Zoom out (Ctrl+Minus)

Question Marks

A question mark ends a sentence that is a direct question.

In English, there should be a finger space after a question mark, but not before.

The sentence after a question mark always starts with a capital letter.

Would you like to play with me?

Where is my pencil case?

Please can I have a drink?

Do you like animals?

How do you change your voice to show a question has been asked?


twinkl
www.twinkl.com

Look at the picture below and tell your grown up three different questions you could ask about the picture.

Think of different questions you could ask about the picture?

? ? ? ? ? ? ? ? ? ?

Question words
Who What
Why Where
When How



What does a lighthouse do? How many kites can you see?

Word bank

beach	sea	sandcastle	lighthouse
café	picnic	sunny	swim
beach hut	boat	seagull	paddle

Challenge

★ Can you write five questions using the word bank to help you?
I have written two to give you an idea.

1. How many people are on the beach?
2. What do you think the weather is like?


Phonics

If you work with Mrs Savage, complete the task below.

Read the captions and match them to the correct picture.



Jim has seven
silver coins



Boats on the river.



Clare and Sarah got
wet in the rain.



Jill has fair hair but
Jack has dark hair.



I can hear an owl
hoot at night.

If you work with Mrs Stubbs, complete the task below.

Can you find any of the phase 5 words in your reading books or storybooks?
Challenge yourself to write a sentence using two of the words like mine.

Mrs Jones called the children to line up.

Hidden Words Phonics Game

Phase 5 Tricky Words



Which hidden tricky words can you find?

oh

Mrs

people

their

called

Mr

looked

asked

could

Find a half (2)

- 1 a) Circle half of the pencils.



- b) Complete the sentence.


Half of 6 is

- 2 Colour half of each group.

a)



b)



- 3 How many counters are there in each group?

Find half of each group.

a)



Half of is

b)



Half of is

c)



is half of

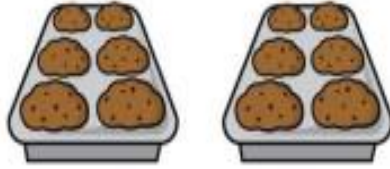
- 4 Complete the sentence.

7 is half of

Try the challenge below.

Challenge 1

Eric bakes these two trays of muffins.



He eats 2 muffins.

His dad eats 3 muffins.

His sister eats 4 muffins.

How many muffins does he have left?

Wishing you all a lovely weekend.

Have fun!

Mrs. Stubbs

xxx